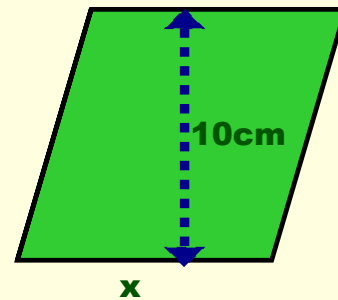
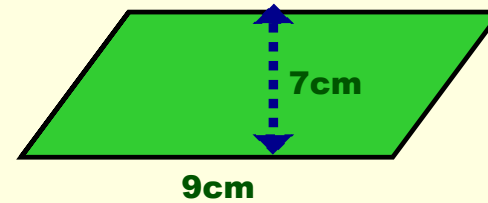


1. Find the area of the parallelogram

2. Find the area of the parallelogram

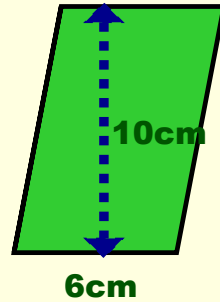


3. The area of the parallelogram is 40cm^2 .
Find the length of the side x .



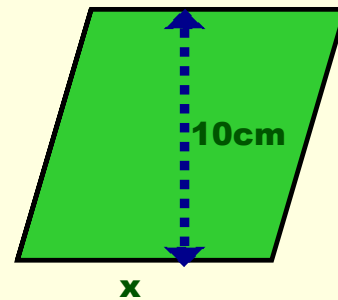
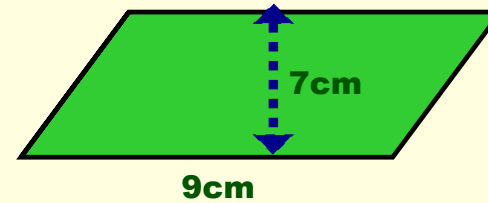
4. The area of the parallelogram is 36cm^2 .
Find the height h .

Answers on the next page.



1. Find the area of the parallelogram

2. Find the area of the parallelogram



3. The area of the parallelogram is 40cm^2 .
Find the length of the side x .



4. The area of the parallelogram is 36cm^2 .
Find the height h .

Answers on the next page.